

PCI 718



by
Heidi Mittiga



TABLE OF CONTENTS

Introduction	4
Explain Each Time Family	5
Moving to the Other Time Family Worksheets	6
Using The Progress Chart	7
Getting Started	8
Examples of Completed “O’Clock Family” Worksheets – Levels 1 and 2	9
Examples of Completed “Fifteen Family” Worksheets - Levels 1 and 2	11
Examples of Completed “Thirty Family” Worksheets – Levels 1 and 2	13
Examples of Completed “Forty-Five Family” Worksheets – Levels 1 and 2	15
Introducing the Family Album	17
O’Clock Family Album	18
Fifteen Family Album	20
Thirty Family Album	22
Forty-Five Family Album	24
Answer Key	26
Time Families Progress Chart	50

TIME FAMILY WORKSHEETS

“O’Clock Family” Worksheets

Match the Clocks – Level 1	1–4
Match the Clocks – Level 2	5–8
Write the Time – Level 1	9–12
Write the Time – Level 2	13–16
Draw the Hands – Level 1	17–20
Draw the Hands – Level 2	21–24

“Fifteen Family” Worksheets

Match the Clocks – Level 1	25–28
Match the Clocks – Level 2	29–32
Write the Time – Level 1	33–36
Write the Time – Level 2	37–40
Draw the Hands – Level 1	41–44
Draw the Hands – Level 2	45–48

“Thirty Family” Worksheets

Match the Clocks – Level 1	49–52
Match the Clocks – Level 2	53–56
Write the Time – Level 1	57–60
Write the Time – Level 2	61–64
Draw the Hands – Level 1	65–68
Draw the Hands – Level 2	69–72

“Forty-Five Family” Worksheets

Match the Clocks – Level 1	73–76
Match the Clocks – Level 2	77–80
Write the Time – Level 1	81–84
Write the Time – Level 2	85–88
Draw the Hands – Level 1	89–92
Draw the Hands – Level 2	93–96



O'CLOCK FAMILY









"We Always Point UP With Our Big Hand"

name

date

LEVEL 1

MATCH THE CLOCKS: Draw lines to connect the clocks that match.





FIFTEEN FAMILY






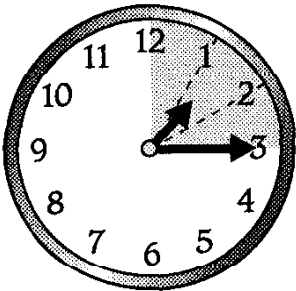


"We Always Point **RIGHT** With Our Big Hand"

name

date

LEVEL 2

MATCH THE CLOCKS: Draw lines to connect the clocks that match.





THIRTY FAMILY

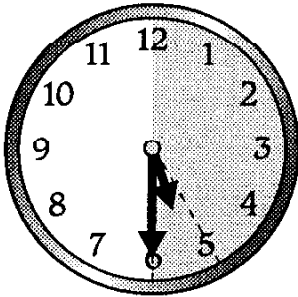
"We Always Point DOWN With Our Big Hand"

name _____


date _____

LEVEL 1


WRITE THE TIME: Write the digital time under each clock.




:



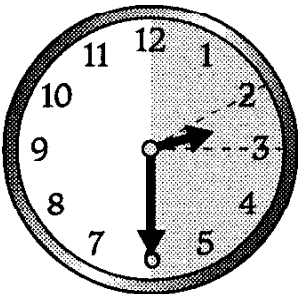
:



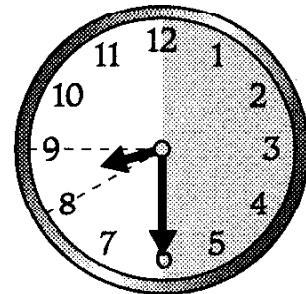
:



:



:



:



FORTY-FIVE FAMILY


"We Always Point LEFT With Our Big Hand"

name


date

LEVEL 2


DRAW THE HANDS: Draw the hands on each clock to show the time.




2:45




5:45




8:45



7:45



11:45



1:45