








## ADDITION - SUBTRACTION


Use prices from the menu.  
Solve each problem.







1. You buy a  and a   
How much in all?  
\$ \_\_\_\_\_

4. How much for  
this food?   
   
\$ \_\_\_\_\_

2. How much more does  
 cost  
than a  ?  
\$ \_\_\_\_\_

5. Had \$2.25  
Bought   
How much left?  
\$ \_\_\_\_\_

3. Dan bought  and   
What is the total cost?  
\$ \_\_\_\_\_

6. Dave bought  Dick bought   
How much more did  
Dave spend?  
\$ \_\_\_\_\_